

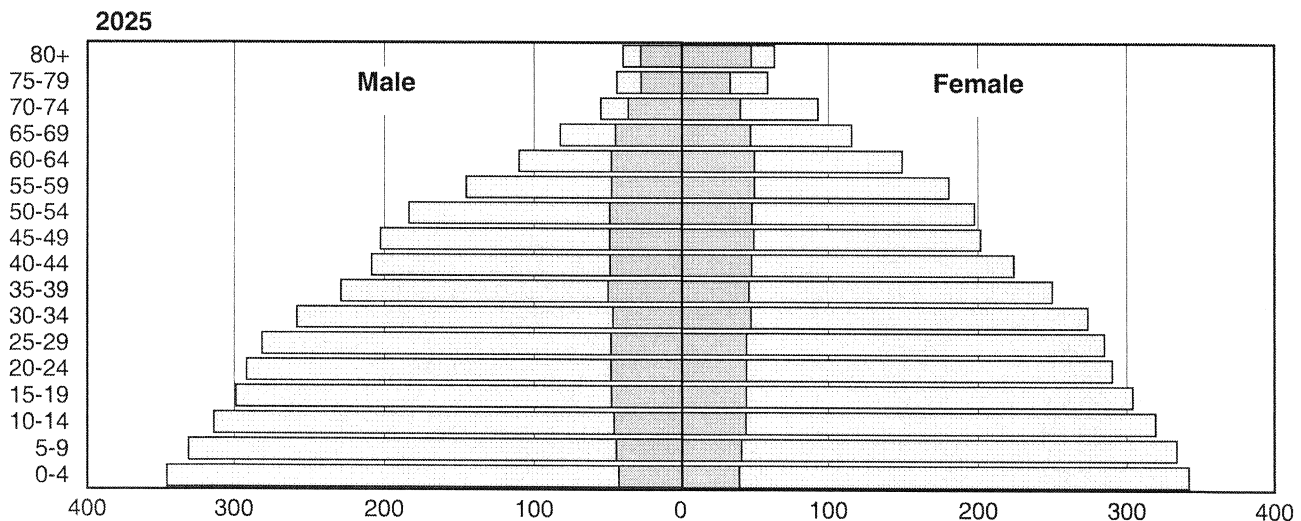
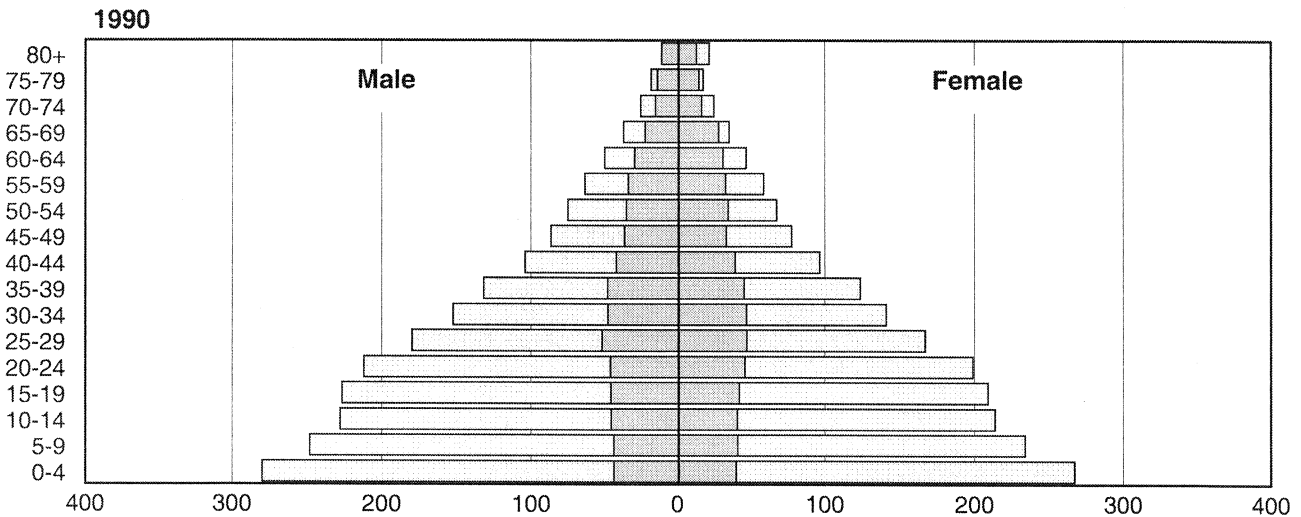
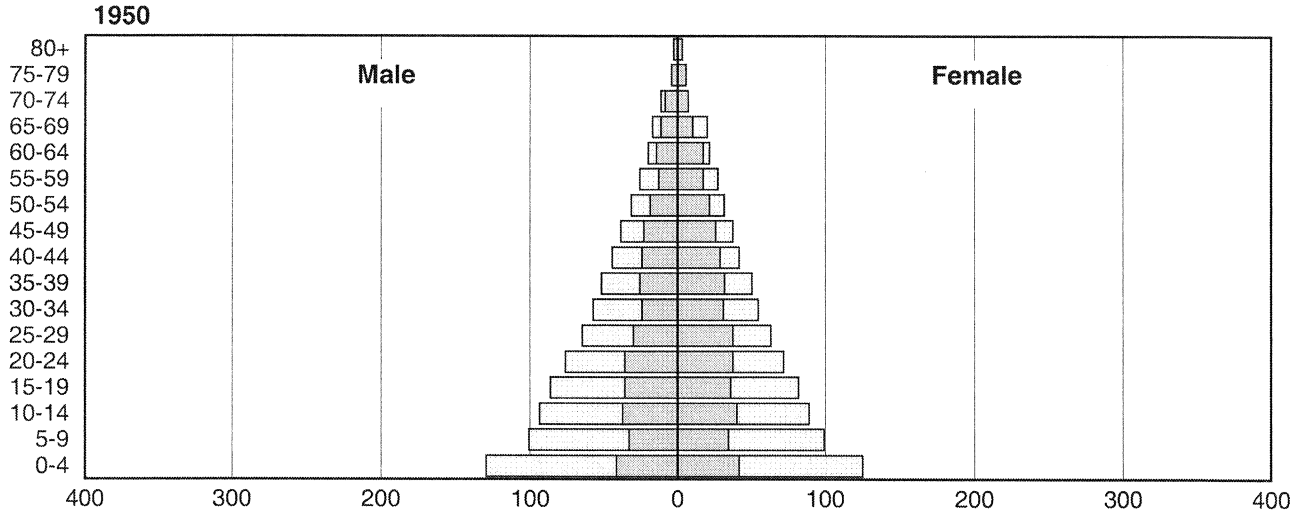


# STUDENT HANDOUT

## Population, by Age and Sex: 1950, 1990, and 2025

(In millions)

-  Developing Countries
-  Developed Countries



Source: U.S. Bureau of the Census Center for International Research and UNDIESA, 1991d.

NAME \_\_\_\_\_



## ACTIVITY 4A: STUDENT WORKSHEET

### POPULATION PYRAMID ANALYSIS

Look at the population pyramids, “Population, by Age and Sex: 1950, 1990, 2025,” to answer the following questions.

#### ***PART I. INTERPRETING GRAPHS: circle the letter which corresponds with the correct answer.***

- In 1950, in developed countries, which age category had the greatest number of females?
  - 35–39
  - 50–54
  - 0–4
  - 15–19
- In 1950, in developing countries, how many males were in the 10–14 age category?
  - less than 50 million
  - about 75 million
  - more than 100 million
  - about 125 million
- In 1990, in developed countries, which age category had the greatest number of males?
  - 40–44
  - 35–39
  - 30–34
  - 25–29
- In 1990, in developed countries, what was the total number of males and females, age 10–14?
  - about 80 million
  - about 40 million
  - about 180 million
  - about 140 million
- In 1990, in developing countries, which age category had the least number of females?
  - 0–4
  - 20–24
  - 75–79
  - 80+
- In 2025, in developing countries, how many males will be 50–54?
  - about 300 million
  - about 200 million
  - about 100 million
  - about 50 million
- In 2025, in developed countries, how many females are between 0 and 14 years old?
  - more than 250 million
  - about 120 million
  - less than 80 million
  - about 40 million
- In 2025, in developed countries, which age group will have the greatest number of females?
  - 60–64
  - 70–74
  - 75–79
  - 80+